

MATHEMATICS
PRIMARY 1
NUMBERS TO 100
ADDITION AND SUBTRACTION WITHIN 100

(2021)

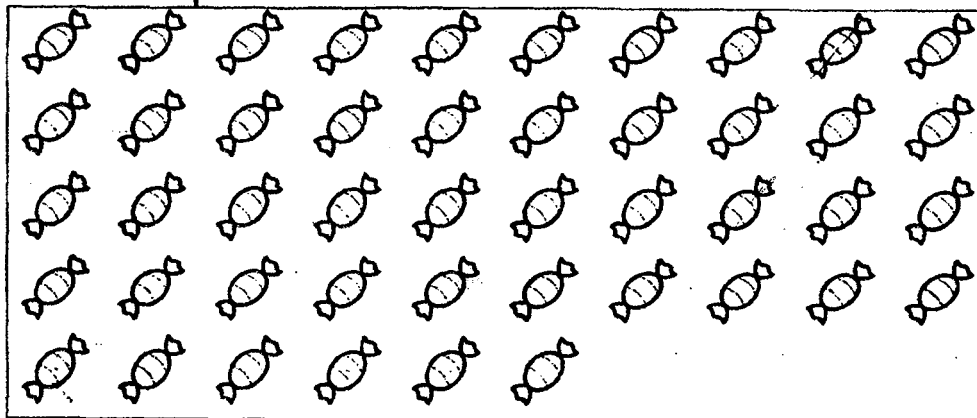
Name: _____ () Date: _____

Class: Primary 1 _____ Parent's Signature: _____

Section A: MCQ (5 x 1 mark = 5 marks)

Read the questions carefully. Choose the correct answer and write its number in the brackets provided.

1. Look at the picture shown below.




How many sweets are there?

- (1) 44
- (2) 45
- (3) 46
- (4) 47

()

2. What is the missing number in the number pattern below?



- (1) 30
- (2) 60
- (3) 80
- (4) 90

()

3. Which of these numbers is **greater than** 43?

- (1) 42
- (2) 34
- (3) 51
- (4) 23

()

4. 10 less than 67 is .

What is the missing number?

- (1) 57
- (2) 66
- (3) 68
- (4) 77

()

5. $68 + 23 = \boxed{?}$

What is the missing number?

- (1) 44
- (2) 45
- (3) 81
- (4) 91

()

Section B: Open-ended Questions (19 marks)

Fill in the correct answers in the spaces provided.

Questions 6 to 12 carry 1 mark each.

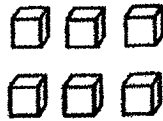
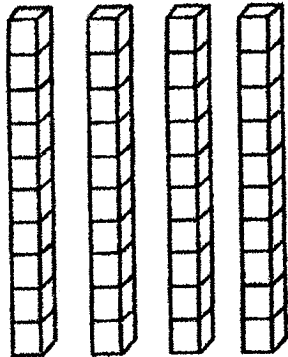
6. Write in words.

48	
----	--

7. Write in numbers.

seventy-five	
--------------	--

8. Count all the cubes.
How many cubes are there altogether? Fill in the blanks.



tens

ones

9. Add 56 and 8.

The answer is

10. Arrange the numbers from the greatest to the smallest.

68

95

64

84

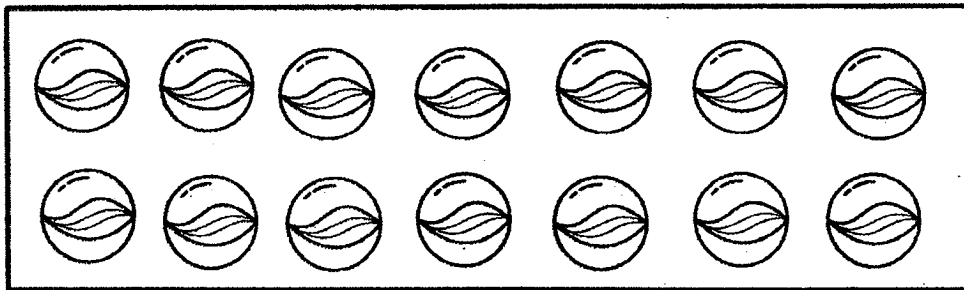
_____ , _____ , _____ , _____
greatest

11. Look at the 4 number cards below. Form the smallest number that is between 50 and 100 using only 2 number cards.



The answer is

12. Ali has 14 marbles. He gives 6 marbles to Tina. How many marbles has Ali left?



Ali has

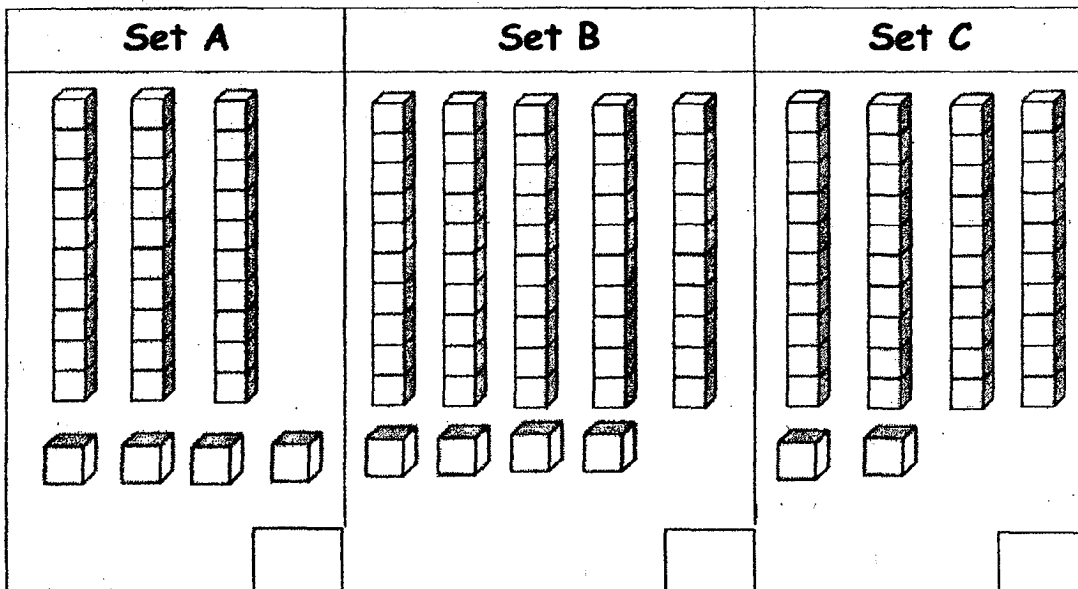
marbles left.

Questions 13 to 18 carry 2 marks each.

13. Complete the number pattern below. Write your answer in the box.



Use the pictures below and answer Questions 14 and 15.







14. Count all the cubes in each set and write down the numbers in the boxes.

15. (a) Set _____ has the least number of cubes.

(b) Set _____ has the greatest number of cubes.

Read the sentences given to answer Questions 16 and 17.

The pictures below show the points scored by 4 children in a game they played.

Sean	Chris	Mark	Jimmy
 93	 63	 ?	 ?



16. Mark scored 28 points fewer than Sean.
How many points did Mark score?

17. Sean scored 21 points more than Jimmy.
How many points did Jimmy score?

18. Dan used  and  to represent 2 numbers.

$$\text{○} + \text{○} + \text{○} = 12$$

$$\text{△} + \text{○} = 10$$

What does  and  stand for?

$$\text{○} = \underline{\hspace{2cm}}$$

$$\text{△} = \underline{\hspace{2cm}}$$

Section C: Problem Sums (3 × 2 marks = 6 marks)

Do these sums carefully. Show all your equations and workings clearly in the spaces provided.

19. There are 8 cherries and 7 strawberries in a box.
How many fruits are there in the box?

Workings

$$\square \bigcirc \square = \square$$

There are fruits in the box.

20. Tom has 17 stamps. Jerry has 9 stamps fewer than Tom. How many stamps does Jerry have?

$$\square \ominus \square = \square$$

Jerry has stamps.

21. May has 6 cupcakes. Her father gave her some cupcakes and she now has 15 cupcakes. How many cupcakes did her father give her?

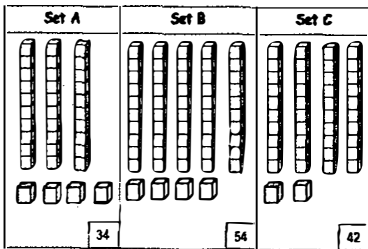

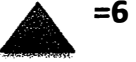
$$\square \oplus \square = \square$$

Her father gave her cupcakes.

ANSWER KEY

YEAR : 2021
LEVEL : PRIMARY 1
SUBJECT : MATHEMATICS
TERM : NUMBERS TO 100 ADDITION AND SUBTRACTION
WITHIN 100

Q1	Q2	Q3	Q4	Q5
3	2	3	1	4

Q6	forty-eight	Q7	75				
Q8	4 tens 6 ones	Q9	64				
Q10	95, 84, 68, 64	Q11	72				
Q12	Ali has 8 marbles left.	Q13	80				
Q14		Q15	<table border="1" style="width: 100%; text-align: center;"> <tr> <td>(a)</td> <td>Set A</td> </tr> <tr> <td>(b)</td> <td>Set B</td> </tr> </table>	(a)	Set A	(b)	Set B
(a)	Set A						
(b)	Set B						
Q16	65	Q17	72				
Q18	 	Q19	$8+7=15$ There are 15 fruits in the box.				
Q20	$17-9=8$ Jerry has 8 stamps...	Q21	$15-6=9$ Her father gave her 9 cupcakes.				

